

**Dr Oliver Mathematics**  
**Mathematics Standard Grade: Credit Level**  
**2012 Paper 2: Calculator**  
**1 hour 20 minutes**

The total number of marks available is 53.

You must write down all the stages in your working.

1. There are 2.69 million vehicles in Scotland. (4)  
It is estimated that this number will increase at a rate of 4% each year.  
If this estimate is correct, how many vehicles will there be in 3 years' time?  
Give your answer correct to 3 significant figures.

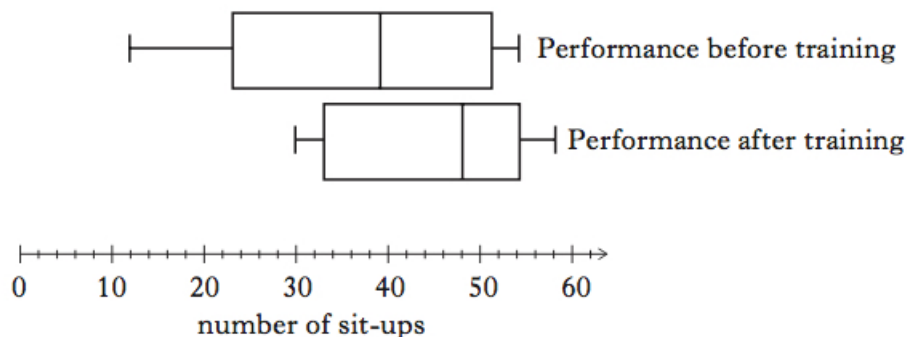
2. Before training, athletes were tested on how many sit-ups they could do in one minute.  
The following information was obtained:

Lower quartile ( $Q_1$ )	23
Median ( $Q_2$ )	39
Upper quartile ( $Q_3$ )	51

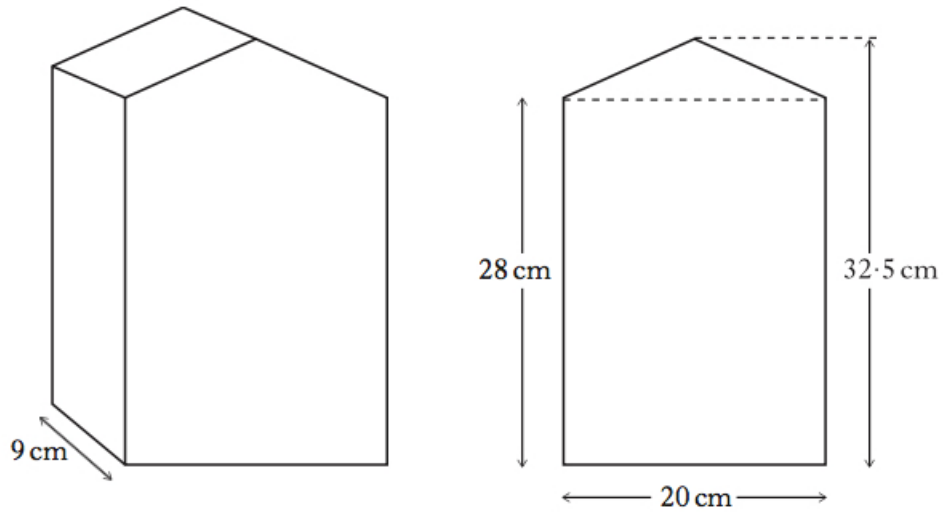
- (a) Calculate the semi-interquartile range. (1)

After training, the athletes were tested again.

**Both** sets of data are displayed as box-plots.

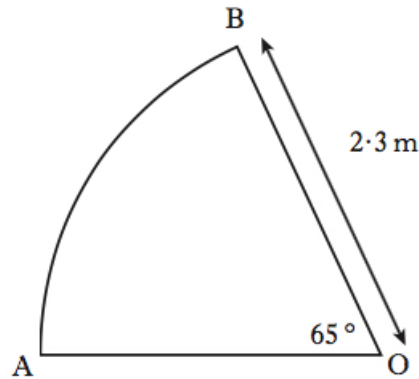


- (b) Make **two** valid statements to compare the performances before and after training. (2)
3. A container for oil is in the shape of a prism. (4)  
The width of the container is 9 centimetres.  
The uniform cross section of the container consists of a rectangle and a triangle with dimensions as shown.



Calculate the volume of the container, **correct to the nearest litre**.

4. A sector of a circle, centre  $O$ , is shown below. (3)



The radius of the circle is 2.3 metres.

Angle  $AOB$  is  $65^\circ$ .

Find the length of the arc  $AB$ .

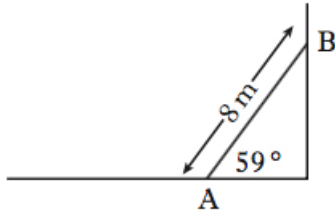
5. The depth,  $d$ , of water in a tank, varies directly as the volume,  $v$ , of water in the tank and inversely as the square of the radius,  $r$ , of the tank. (4)

When the volume of water is  $60\,000\text{ cm}^3$ , the depth of water is 50 cm, and the radius of the tank is 20 cm.

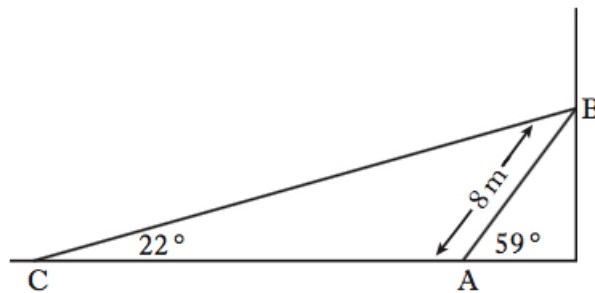
Calculate the depth of the water, when the volume of water is  $75\,000\text{ cm}^3$  and the radius of the tank is 25 cm.

6. The price for Paul's summer holiday is £894.40. (3)  
 The price includes a 4% booking fee.  
 What is the price of his holiday without the booking fee?

7. A heavy metal beam,  $AB$ , rests against a vertical wall as shown. (4)  
 The length of the beam is 8 metres and it makes an angle of  $59^\circ$  with the ground.

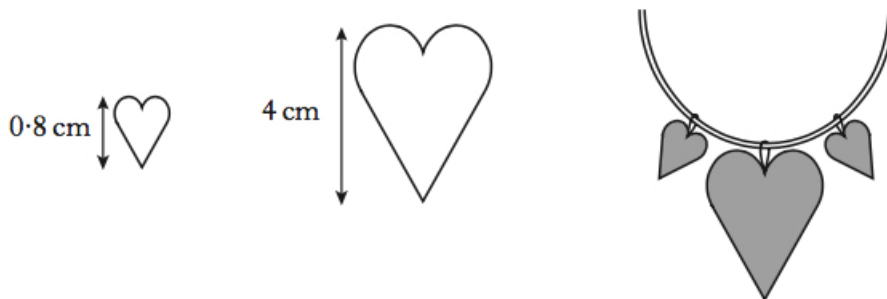


A cable,  $CB$ , is fixed to the ground at  $C$  and is attached to the top of the beam at  $B$ . The cable makes an angle of  $22^\circ$  with the ground.



Calculate the length of cable  $CB$ .

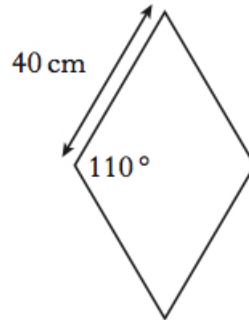
8. A necklace is made of beads which are mathematically similar. (3)



The height of the smaller bead is 0.8 centimetres and its area is 0.6 square centimetres.  
 The height of the larger bead is 4 centimetres.  
 Find the area of the larger bead.

9. Paving stones are in the shape of a rhombus.

(4)

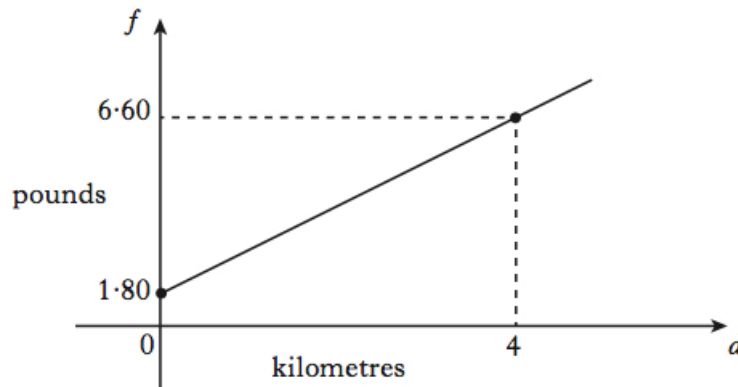


The side of each rhombus is 40 centimetres long.

The obtuse angle is  $110^\circ$ .

Find the area of one paving stone.

10. A taxi fare consists of a call-out charge of £1.80 **plus** a fixed cost per kilometre. A journey of 4 kilometres costs £6.60. The straight line graph shows the fare,  $f$  pounds, for a journey of  $d$  kilometres.



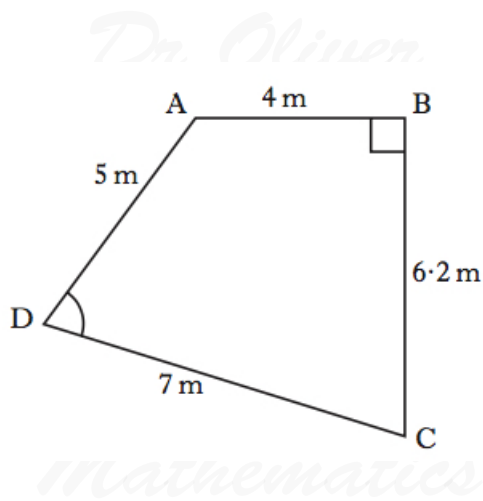
- (a) Find the equation of the straight line.

(3)

- (b) Calculate the fare for a journey of 7 kilometres.

(2)

11. Quadrilateral  $ABCD$  with angle  $ABC = 90^\circ$  is shown below.



$AB = 4$  metres.

$BC = 6.2$  metres.

$CD = 7$  metres.

$AD = 5$  metres.

(a) Calculate the length of  $AC$ .

(2)

(b) Calculate the size of angle  $ADC$ .

(4)

12.

$$f(x) = 3 \sin x^\circ, 0 \leq x < 360.$$

(a) Find  $f(270)$ .

(1)

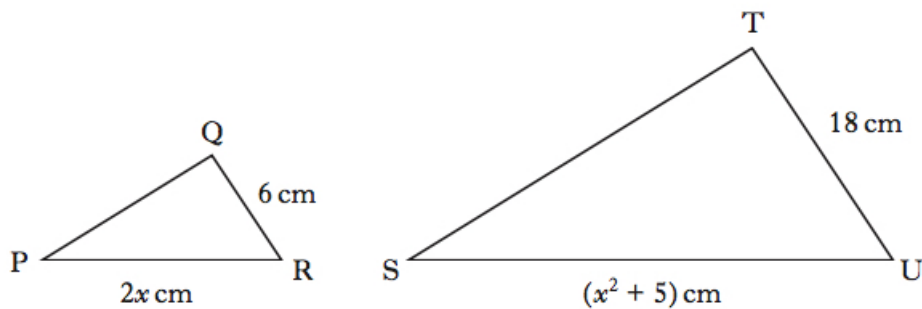
(b)  $f(t) = 0.6$ .

(4)

Find the two possible values of  $t$ .

13. Triangles  $PQR$  and  $STU$  are mathematically similar.

The scale factor is 3 and  $PR$  corresponds to  $SU$ .



(a) Show that

(2)

$$x^2 - 6x + 5 = 0.$$

(b) Given  $QR$  is the shortest side of triangle  $PQR$ , find the value of  $x$ .

(3)